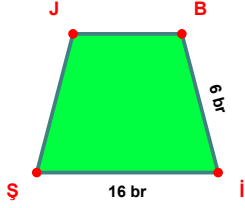
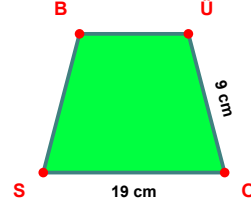


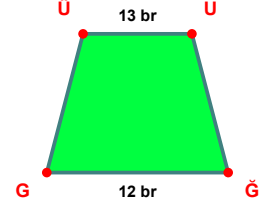
**SORU:** Aşağıdaki şekillerde verilen, kenar uzunlukları farklarını bulunuz.



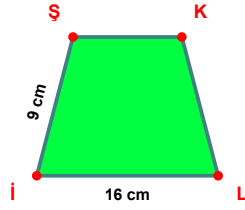
$$|İŞ| - |BJ| = \dots\dots\dots$$



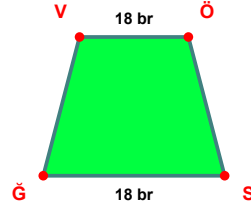
$$|OS| - |ÜO| = \dots\dots\dots$$



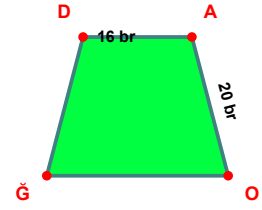
$$|ÜU| - |ĞG| = \dots\dots\dots$$



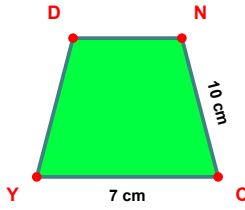
$$|Lİ| - |İŞ| = \dots\dots\dots$$



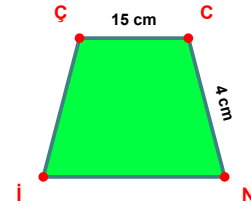
$$|VÖ| - |ŞG| = \dots\dots\dots$$



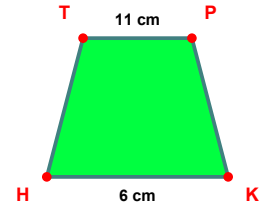
$$|AO| - |DA| = \dots\dots\dots$$



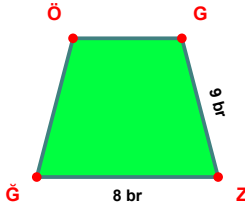
$$|NC| - |CY| = \dots\dots\dots$$



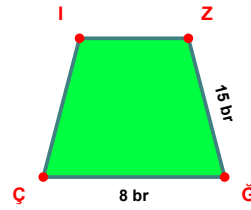
$$|ÇC| - |CN| = \dots\dots\dots$$



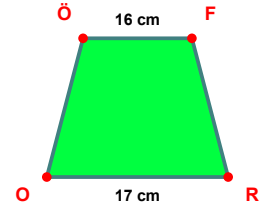
$$|TP| - |KH| = \dots\dots\dots$$



$$|GZ| - |ZĞ| = \dots\dots\dots$$

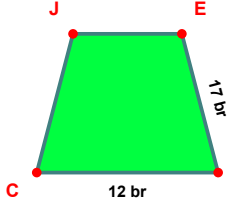


$$|ZĞ| - |ĞÇ| = \dots\dots\dots$$

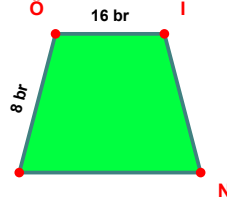


$$|RO| - |ÖF| = \dots\dots\dots$$

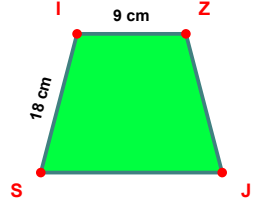
**SORU:** Aşağıdaki şekillerde verilen, kenar uzunlukları farklarını bulunuz.



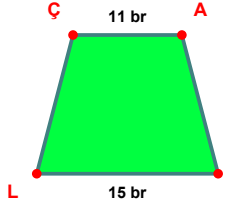
$$|EH| - |HC| = \dots\dots\dots$$



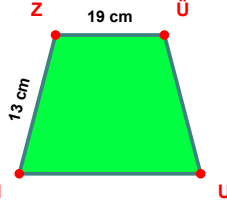
$$|Öİ| - |İÖ| = \dots\dots\dots$$



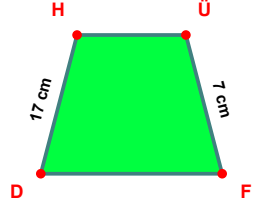
$$|Sİ| - |İZ| = \dots\dots\dots$$



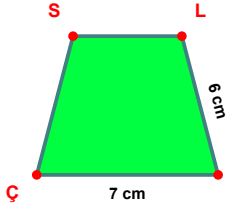
$$|FL| - |ÇA| = \dots\dots\dots$$



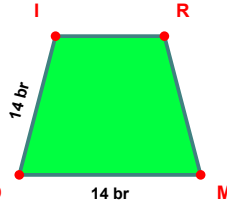
$$|ZÜ| - |NZ| = \dots\dots\dots$$



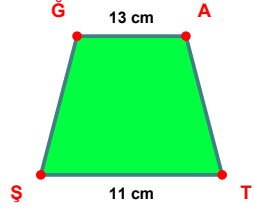
$$|DH| - |ÜF| = \dots\dots\dots$$



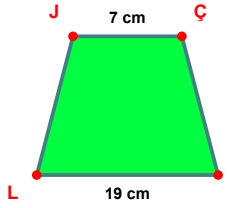
$$|KÇ| - |LK| = \dots\dots\dots$$



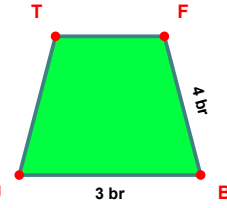
$$|MD| - |DI| = \dots\dots\dots$$



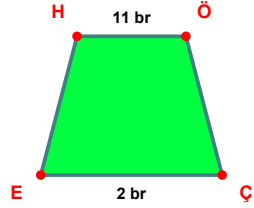
$$|ĞA| - |TŞ| = \dots\dots\dots$$



$$|SL| - |JÇ| = \dots\dots\dots$$



$$|FB| - |BÜ| = \dots\dots\dots$$



$$|HÖ| - |ÇE| = \dots\dots\dots$$

SÜREÇ ODAKLI DEĞERLENDİRME ÖLÇEĞİ

Doğru Sayısı: ..... / 24

Öğretmen ilgili kutucuğu işaretler.

Geliştirilmeli (0-8)

İyi (9-14)

Çok İyi (15-20)

Mükemmel (21-24)

☐☐☐☐

Hazırlayan: .....

Bu bölüme sınıfınızın ilgili kazanıma yönelik genel durumuna ilişkin gözlem ve izlenimlerinizi, öğrencilerinizin bu kazanımla ilgili öğrenme eksikliklerini ve bu eksikliklerin giderilmesi amacıyla yaptığınız/yapmayı planladığınız faaliyetleri not edebilirsiniz.

No	Adı - Soyadı	Toplam Puan	Değerlendirme
1			
2			
3			
4			
5			
6			
7			
8			
9			
10			
11			
12			
13			
14			
15			
16			
17			
18			
19			
20			
21			
22			
23			
24			
25			
26			
27			
28			
29			
30			
31			
32			
33			
34			
35			

Hazırlayan: .....